





NAME: _____

Combining Like Terms and Distributive Property

LET'S EAT!!

The following are four combo meals from a local fast food restaurant.



Using the distributive property and combining like terms, show how many of each item you would have for the following orders. Feel free to represent items with letters.

example: two Meal 1

$$2(h + f + d) = 2h + 2f + 2d$$

I'd have two hamburgers, two fries, and two drinks.

1) a Meal 1 and a Meal 3

2) three Meal 2 and a Meal 4

3) two Meal 3, a Meal 2, and a Meal 4

4) if you ended up with six burgers, four fries, and four drinks, what are the possible combinations of meals you could have ordered?